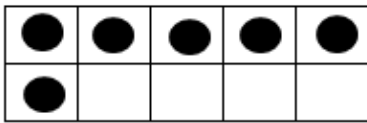


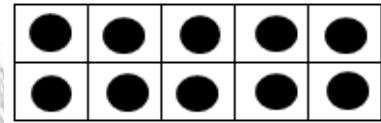
Mostre o 10 de 10 formas diferentes

Atividade (1º ano do Ensino Fundamental I)

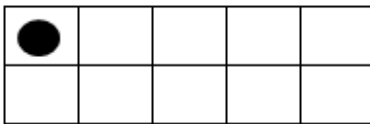
Preencha os quadrados em branco com círculos e coloque o valor na linha abaixo:



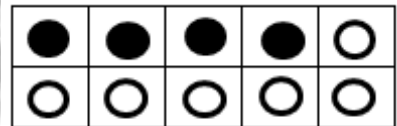
$6 + \underline{\quad} = 10$



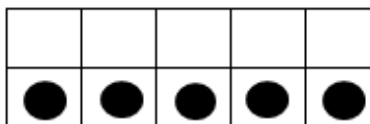
$10 + \underline{\quad} = 10$



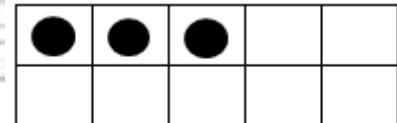
$1 + \underline{\quad} = 10$



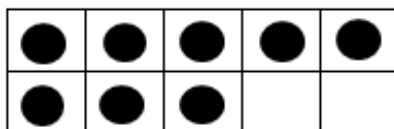
$4 + 6 = \underline{\quad}$



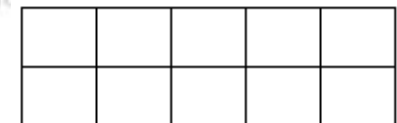
$\underline{\quad} + 5 = 10$



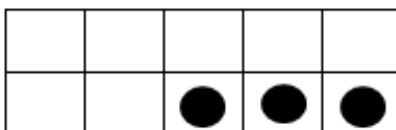
$3 + \underline{\quad} = 10$



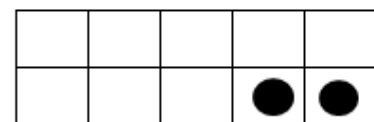
$8 + \underline{\quad} = 10$



$0 + \underline{\quad} = 10$



$\underline{\quad} + 3 = 10$



$\underline{\quad} + 2 = 10$



art: Vanessa Gainc